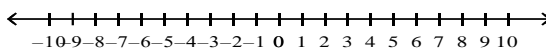


Name: _____

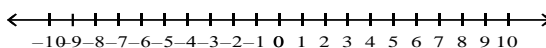
Solving Inequalities Using Multiplication or Division

Solve the following inequalities. Graph and check your solution.

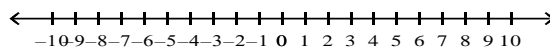
1) $\frac{-2}{3}n \leq 2$



2) $6 \leq \frac{-3}{5}w$



3) $\frac{x}{2} < -1$



4) $-20 > -5c$

