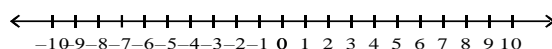


Name: _____

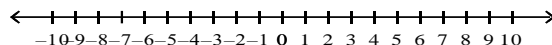
Solving Inequalities Using Addition or Subtraction

Solve the following inequalities. Graph and check your solution.

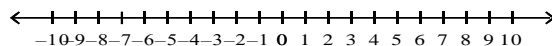
1) $x - 3 < 5$



2) $12 \leq x - 5$



3) $n - 7 \leq -2$



4) $-4 > b - 1$

