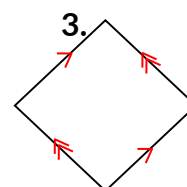
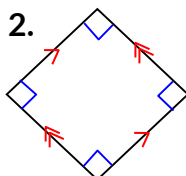
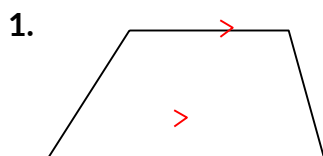


Name: _____

Quadrilaterals

Classify the quadrilateral.



Copy and complete the statement using *always*, *sometimes*, or *never*.

4. A square is _____ a rectangle.
5. A square is _____ a rhombus.
6. A rhombus is _____ a square.
7. A trapezoid is _____ a parallelogram.

Find the value of x .

