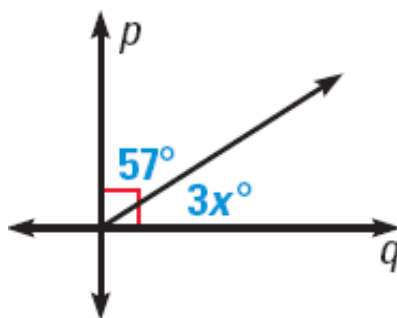


Name: _____

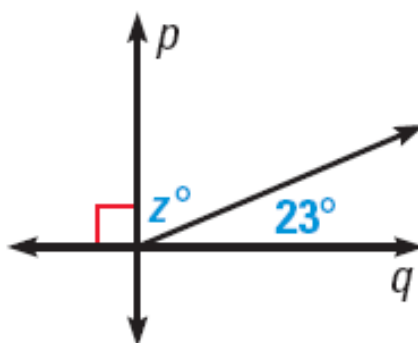
Perpendicular Lines

A) Find the value of the variable, given that $p \perp q$.

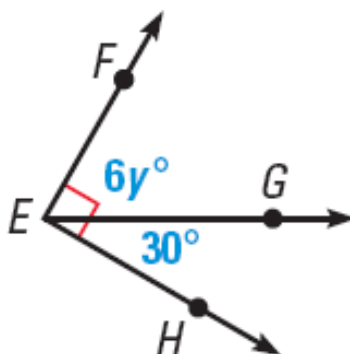
1)



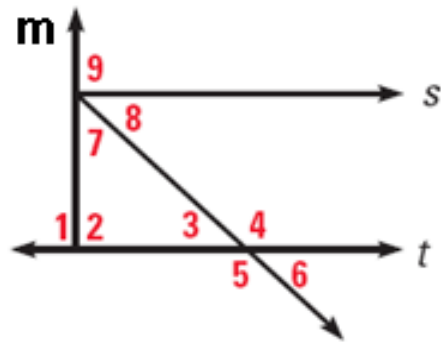
2)



B) Given the diagram below, Find:

3) the value of y 4) $m\angle GEF$

C) Given that $m \perp s$ and $m \perp t$



5) Find $m\angle 2$

6) Find $m\angle 1$

7) Find $m\angle 9$

8) If $m\angle 7 = 42^\circ$, find $m\angle 8$