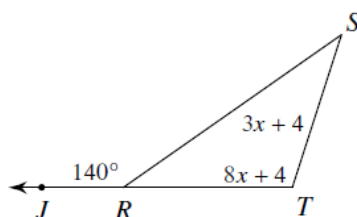


Name: _____

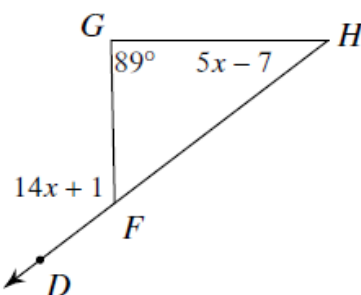
Exterior and Remote Interior Angles of a Triangle

Find the measure of the angle indicated.

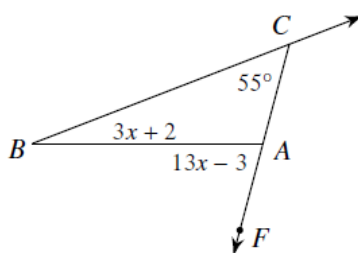
1) Find $m\angle S$



2) Find $m\angle H$.



3) Find $m\angle FAB$.



4) Find $m\angle YDC$

