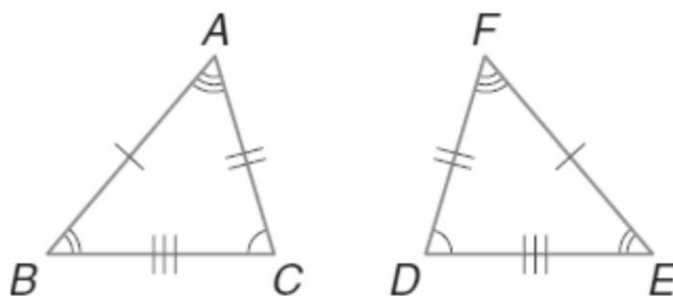


Name: _____

Congruent Triangles

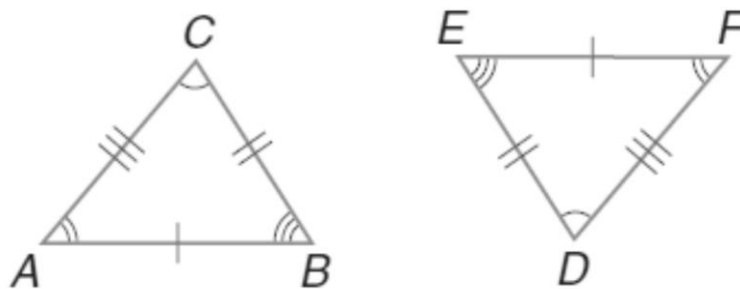
Complete each congruence statement.

1)



$$\triangle ABC \cong \triangle \underline{\quad? \quad}$$

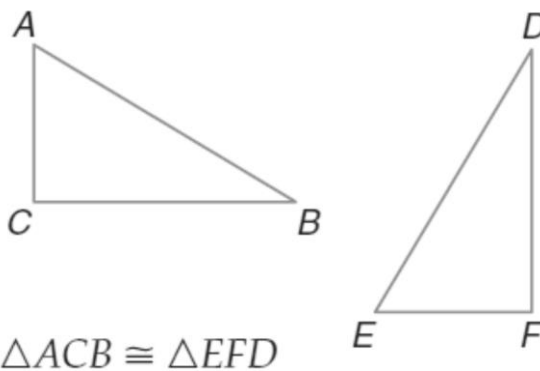
2)



$$\triangle CBA \cong \triangle \underline{\quad? \quad}$$

For each pair of congruent triangles, name the congruent angles and sides. Then draw the triangles, using arcs and slash marks to show the congruent angles and sides.

3)



4)

