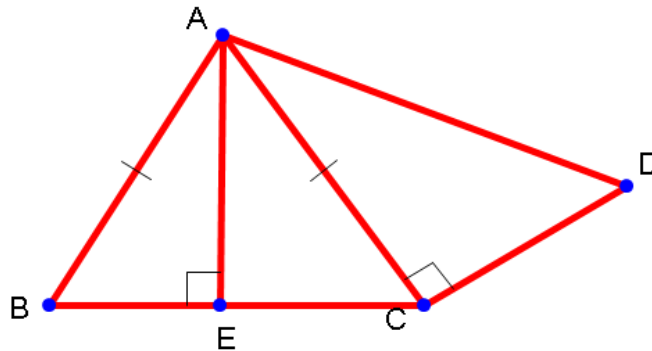


Name: _____

Classify Triangles

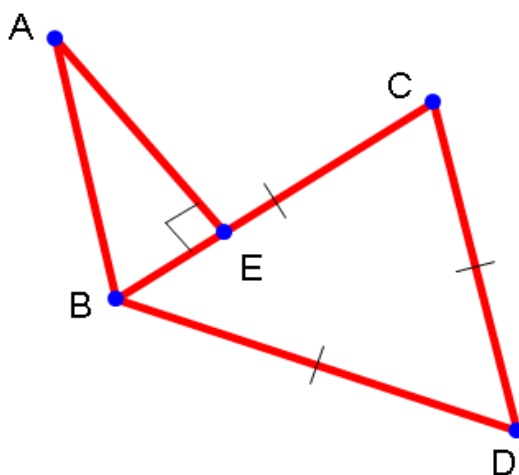
A) Given the diagram below:



1) Deduce the given from the figure

2) Classify $\triangle ABE$ 3) Classify $\triangle ACD$ 4) Classify $\triangle ABC$

B) Given the diagram below:

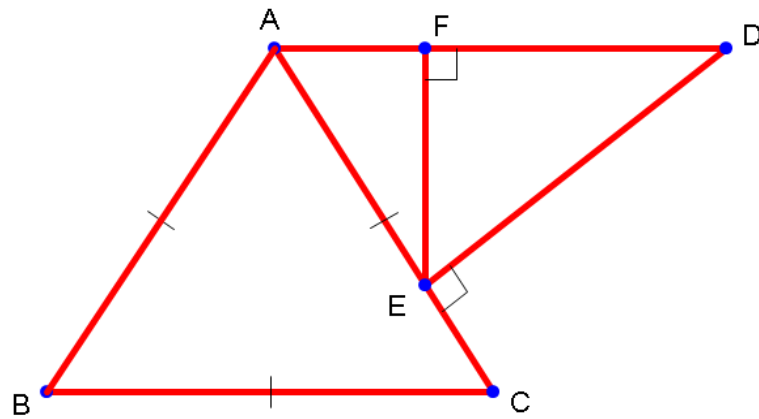


5) Deduce the given from the figure

6) Classify $\triangle ABE$

7) Classify $\triangle BCD$

C) Given the diagram below:



8) Deduce the given from the figure

9) Classify $\triangle ABC$

10) Classify $\triangle EFD$

11) Classify $\triangle AED$