

Name: _____

Classify Polygons

A) Classify each polygon as *convex* or *concave* and *specify the number of sides*.

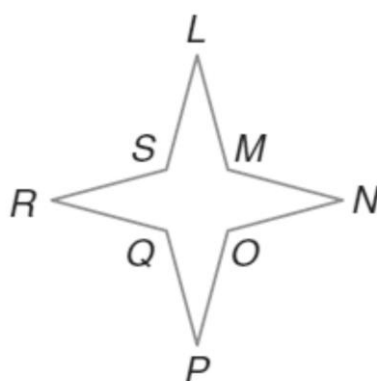
1)



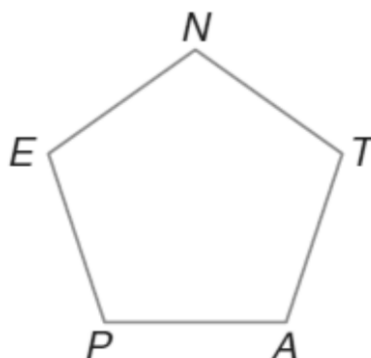
2)



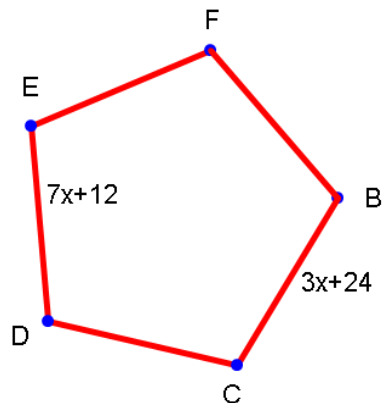
3)



4)



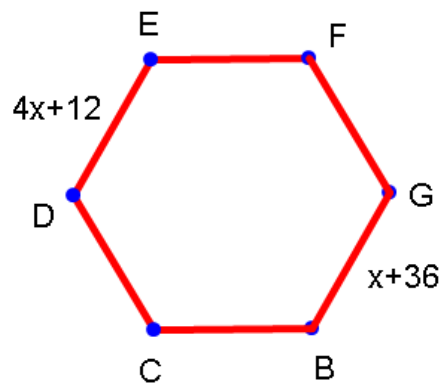
B) Given the regular polygon BCDEF, find:



5) the value of x

6) CB

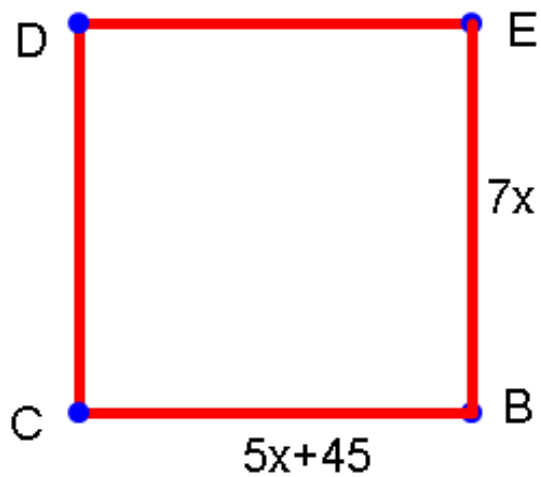
C) Given the regular polygon BCDEFG, find:



7) the value of x

8) CB

D) Given the regular polygon BCDE, find



9) the value of x

10) CB