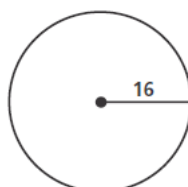


Name: \_\_\_\_\_

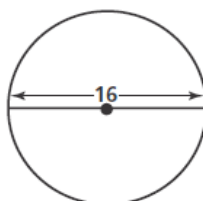
## Circumference and Area of a Circle

A) Find the circumference and the area of each circle in terms of  $\pi$ .

1)



2)



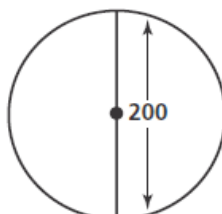
3)



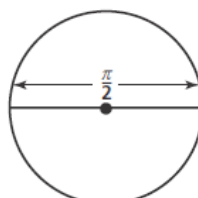
4)



5)



6)



B) Answer each question.

7) Find the area of a circle whose diameter is 122 ft.

8) Find the radius and the diameter of a circle with circumference of 23m.