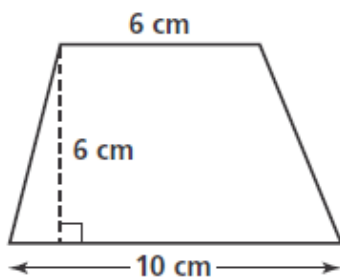


Name: \_\_\_\_\_

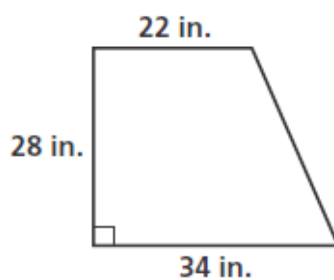
## Area of Parallelograms and Trapezoids

A) Find the area of each trapezoid.

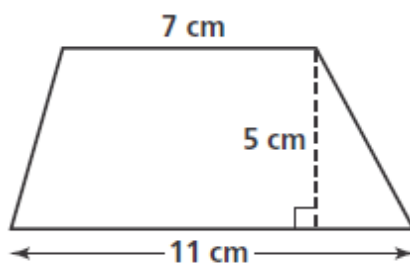
1)



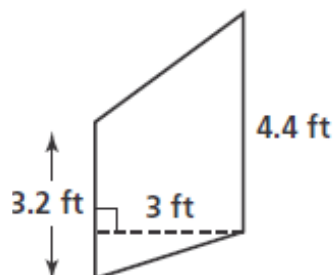
2)



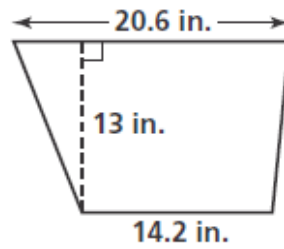
3)



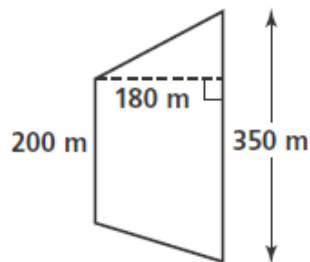
4)



5)



6)



B) Find the area of each parallelogram with the given base and height.

7) base: 3 cm; height: 1.5 cm

8) base: 60 in.; height: 22 in.

9) base: 2 m; height: 120 m

C) A trapezoid has its bases as 11 in. and 8 in. and a height of 9 in.

10) Calculate its area.