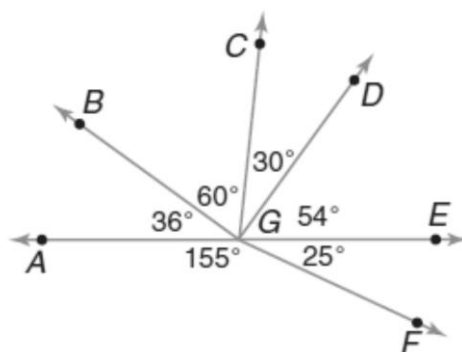


Name: _____

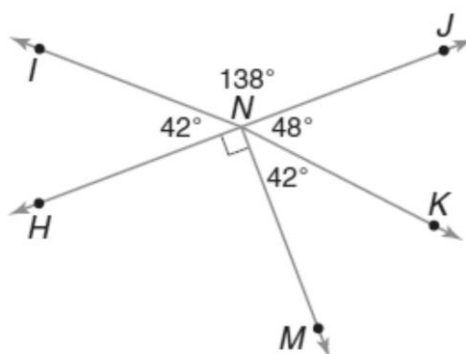
Adjacent Angles and Pairs of Angles

Refer to the given diagram to answer the questions



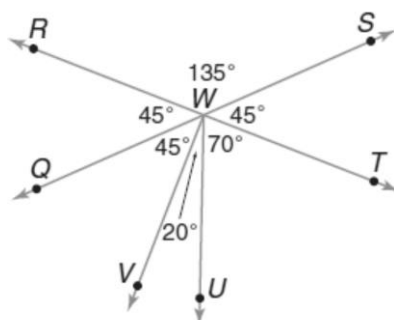
- 1) Name a pair of adjacent complementary angles
- 2) Name a pair of non adjacent complementary angles
- 3) Name a pair of adjacent supplementary angles
- 4) Name a pair of non adjacent supplementary angles

Refer to the given diagram to answer the questions



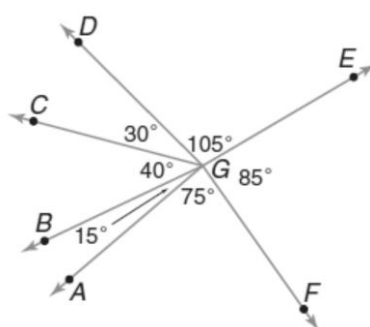
- 5) Name a pair of adjacent complementary angles
- 6) Name a pair of non adjacent complementary angles
- 7) Name a pair of adjacent supplementary angles
- 8) Name a pair of non adjacent supplementary angles

Refer to the given diagram to answer the questions



- 9) Name a pair of adjacent complementary angles
- 10) Name a pair of non adjacent complementary angles
- 11) Name a pair of adjacent supplementary angles
- 12) Name a pair of non adjacent supplementary angles

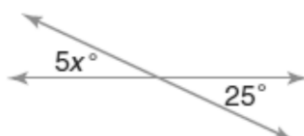
Refer to the given diagram to answer the questions



- 13) Name a pair of adjacent complementary angles
- 14) Name a pair of non adjacent complementary angles
- 15) Name a pair of adjacent supplementary angles
- 16) Name a pair of non adjacent supplementary angles

Find the value of x

17)



18)

