


Name: \_\_\_\_\_

## Triangles

Name the triangle below. Write right, obtuse, or acute.

1)



-----

2)



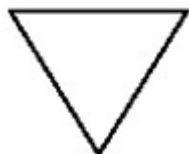
-----

3)



-----

4)



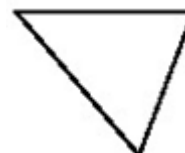
-----

5)



-----

6)



-----