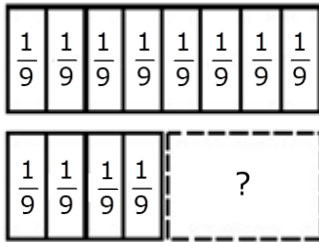


Name: _____

Subtract Like Fractions

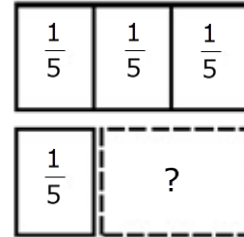
Compare. Find the difference. Write the answer in simplest form.

1)



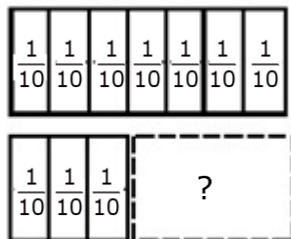
$$\frac{8}{9} - \frac{4}{9} = \underline{\hspace{2cm}}$$

2)



$$\frac{3}{5} - \frac{1}{5} = \underline{\hspace{2cm}}$$

3)



$$\frac{7}{10} - \frac{3}{10} = \underline{\hspace{2cm}}$$