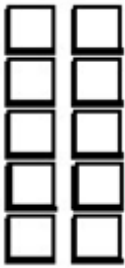


Name: _____


Practice the Facts

Write a division sentence for each.

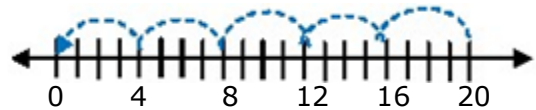
1)



2)



3)



Find the missing factor and quotient.

4) $3 \times \underline{\quad} = 18$ $18 \div 3 = \underline{\quad}$ 5) $4 \times \underline{\quad} = 8$ $8 \div 4 = \underline{\quad}$

6) $6 \times \underline{\quad} = 12$ $12 \div 6 = \underline{\quad}$ 7) $5 \times \underline{\quad} = 35$ $\underline{\quad} = 35 \div 5$

8) $5 \times \underline{\quad} = 40$ $40 \div 5 = \underline{\quad}$ 9) $3 \times \underline{\quad} = 27$ $\underline{\quad} = 27 \div 3$