























Name: \_\_\_\_\_

## Pictograms and Pictographs

**Exercise 1:** Michael, Emily, Joseph, Jennifer, and Kevin went on a fishing trip. Look at the pictograph below to see how many fish each person caught. Answer the questions below.

**Number of Fish Caught**

Michael	  
Emily	     
Joseph	 
Jennifer	      
Kevin	  

 = 6 fish

- How many fish did Michael catch?
- How many fish did Emily catch?
- How many fish did Kevin catch?
- How many more fish did Emily catch than Joseph?
- How many fish did the girls catch?
- How many fish did the boys catch?
- How many more fish did the girls catch than the boys?
- How many fish did Joseph and Kevin catch? 9. Find the sum of the fish caught by all 5 people.
- Who caught fewer fish, Jennifer or Emily?
- Did Jennifer catch an odd or even number of fish?