


Multiply with 2

Write the multiplication sentence for the counters below.



There are 4 groups of 2 counters.

Add the 4 groups together.

$$2 + 2 + 2 + 2 = 8$$

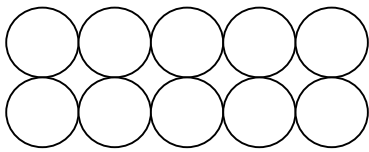
Multiply, since 2 occurred in the addition equation four times.

So, the multiplication sentence for these counters is: $4 \times 2 = 8$.

Examples:

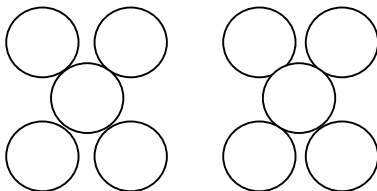
A- Write a multiplication sentence for each.

1)



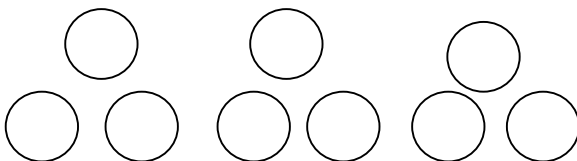
$$\underline{5 \times 2 = 10}$$

2)



$$\underline{2 \times 5 = 10}$$

3)



$$\underline{3 \times 3 = 9}$$

My Real Life

Two students sold tickets for the play. They sold 10 tickets each. How many tickets did they sell in all?

$$\underline{2 \times 10 = 20 \text{ tickets}}$$

