


Name: \_\_\_\_\_

## Model Hundredths


Write the fraction as a decimal. Use a decimal model to help.

1)  $\frac{66}{100}$




-----

2)  $\frac{20}{100}$



-----

3)  $\frac{42}{100}$



-----