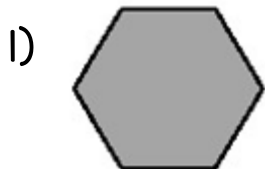


Name: \_\_\_\_\_

**Identify Plane Figures**

Name the polygon. Tell how many sides it has.



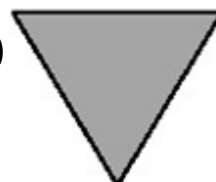
-----

2)



-----

3)



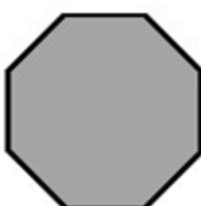
-----

4)



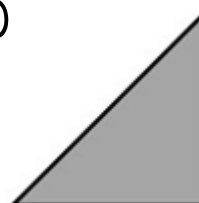
-----

5)



-----

6)



-----