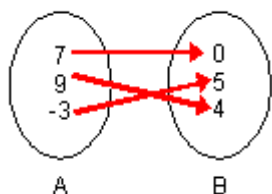


Name: \_\_\_\_\_

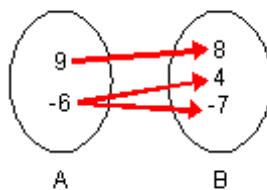
## Functions

1) State whether or not each of the following mappings represents a function.

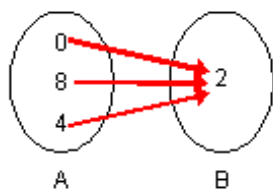
1)



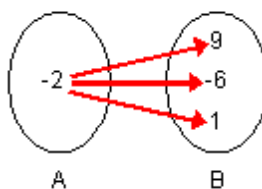
2)



3)

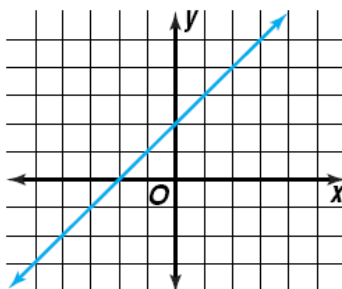


4)

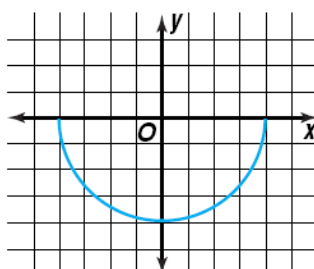


2) Use the vertical line test to determine whether each relation is a function.

1)



2)



3)

