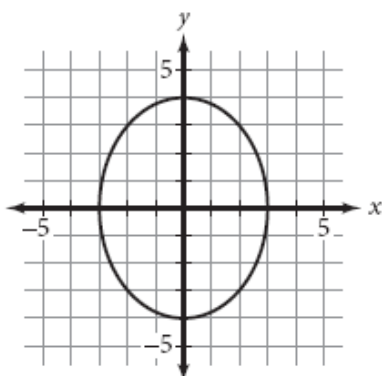


Name: _____

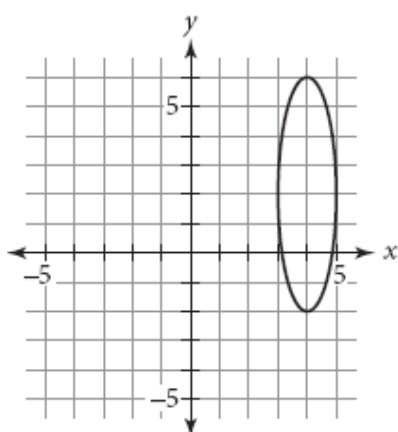
Ellipse

- 1) Write an equation in standard form for each graph.

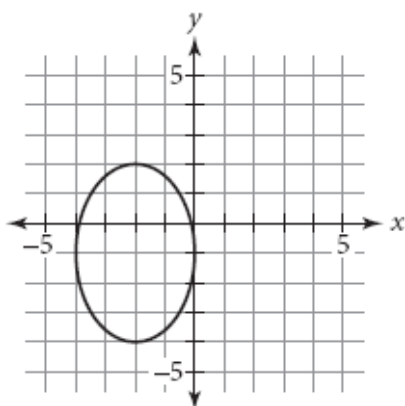
1)



2)



3)



- 2) Find an equation that represents an ellipse centered at the origin whose major axis is 12 units long and whose minor axis is 2 units long. Sketch this ellipse.