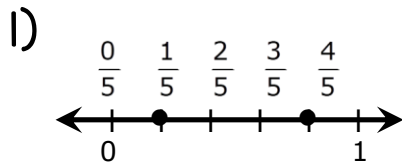


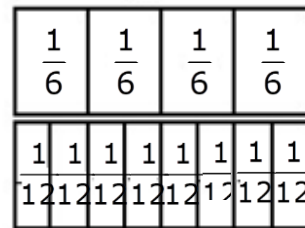
Name: _____

Compare and Order Fractions

Compare. Write $<$, $>$, or $=$ for the \bigcirc .



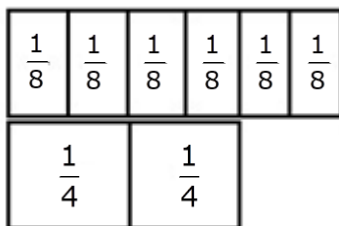
2)



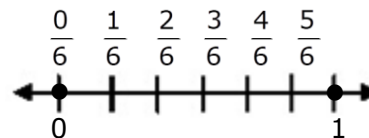
$$\frac{4}{5} \bigcirc \frac{2}{5}$$

$$\frac{4}{6} \bigcirc \frac{8}{12}$$

3)



4)



$$\frac{6}{8} \bigcirc \frac{2}{4}$$

$$\frac{0}{6} \bigcirc \frac{6}{6}$$

5)



6)



$$\frac{3}{4} \bigcirc \frac{6}{8}$$

$$\frac{3}{4} \bigcirc \frac{5}{9}$$