


Name: _____

Arrays with Tens and Ones


Find the product. Show your multiplication and addition.

1)




$4 \times 12 = \underline{\hspace{2cm}}$

2)




$5 \times 11 = \underline{\hspace{2cm}}$

3)



$4 \times 13 = \underline{\hspace{2cm}}$

4)



$6 \times 11 = \underline{\hspace{2cm}}$
