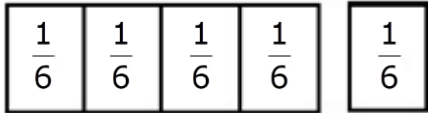


Name: _____

Add Like Fractions

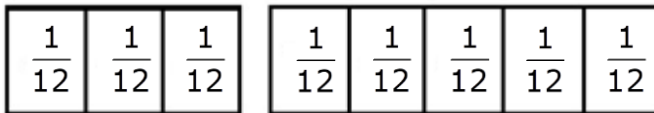
Find each sum. Write the answer in simplest form.

1)



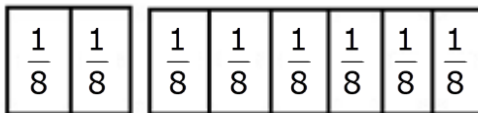
$$\frac{4}{6} + \frac{1}{6} = \underline{\hspace{2cm}}$$

2)



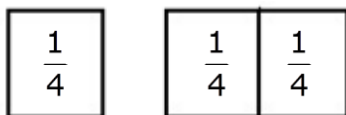
$$\frac{3}{12} + \frac{5}{12} = \underline{\hspace{2cm}}$$

3)



$$\frac{2}{8} + \frac{6}{8} = \underline{\hspace{2cm}}$$

4)



$$\frac{1}{4} + \frac{2}{4} = \underline{\hspace{2cm}}$$