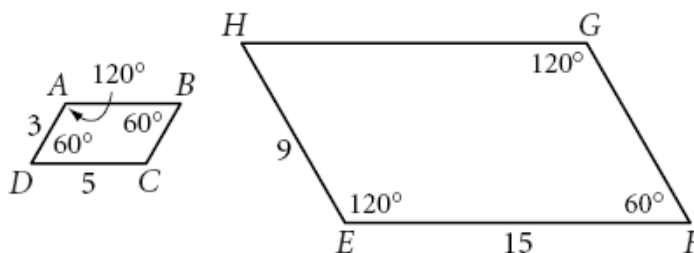


Name: _____

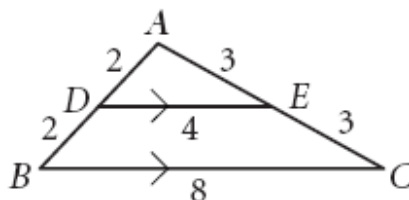
Similar Polygons

1) Decide whether or not the figures are similar. Explain why or why not.

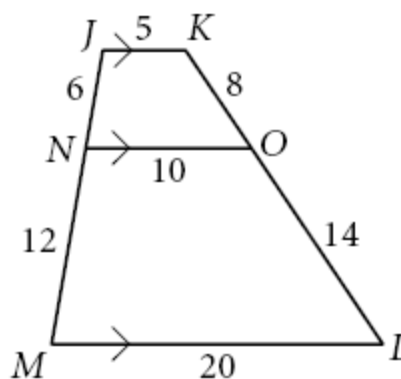
1) $ABCD$ and $EFGH$



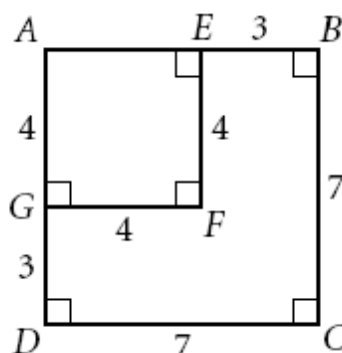
2) $\triangle ABC$ and $\triangle ADE$



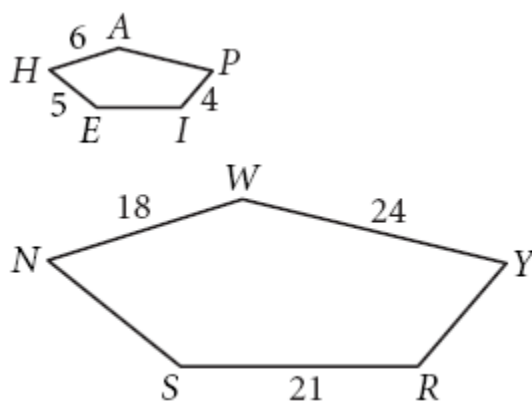
3) $JKON$ and $JKLM$



4) $ABCD$ and $AEFG$



2) $HAPIE \sim NWYRS$. Find the measure of the missing sides



3) $QUAD \sim SIML$. Find the measure of the missing sides and angles.

