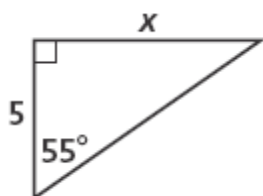


Name: \_\_\_\_\_

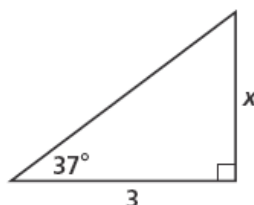
## Right Triangle Trigonometry

1) Find the value of  $x$ .

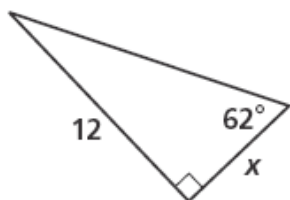
1)



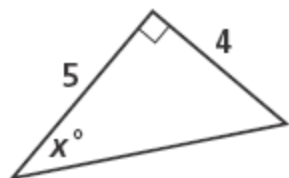
2)



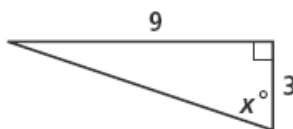
3)

2) Find the value of  $x$ .

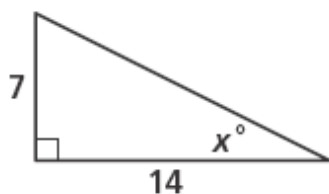
1)



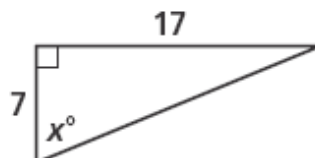
2)



3)



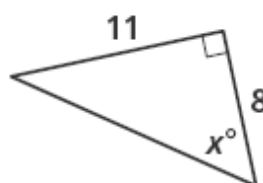
4)



5)

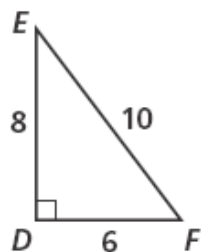


6)

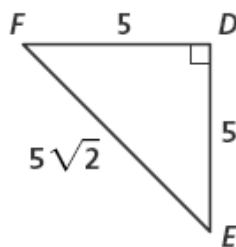


3) Write the tangent ratios for  $\angle E$  and  $\angle F$ .

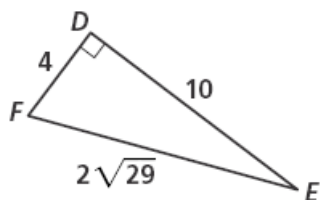
1)



2)

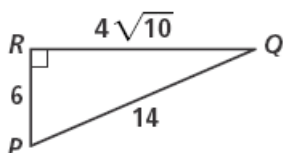


3)

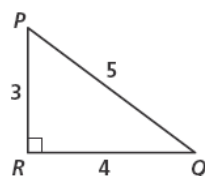


4) Write the ratios for  $\sin P$  and  $\cos P$ .

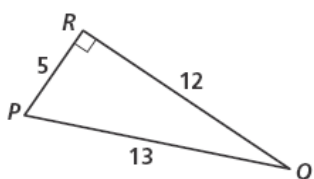
1)



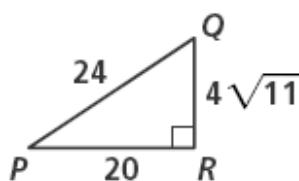
2)



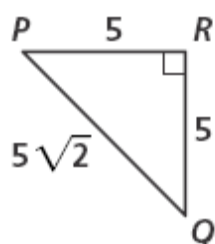
3)



4)



5)



6)

