






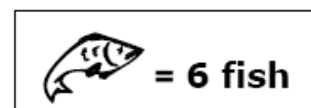
Name: \_\_\_\_\_

## Pictograms and Pictographs

Michael, Emily, Joseph, Jennifer, and Kevin went on a fishing trip. Look at the pictograph below to see how many fish each person caught. Answer the questions below.

**Number of Fish Caught**

Michael	
Emily	
Joseph	
Jennifer	
Kevin	



1. How many fish did Michael catch?
2. How many fish did Emily catch?
3. How many fish did Kevin catch?
4. How many more fish did Emily catch than Joseph?
5. How many fish did the girls catch?
6. How many fish did the boys catch?