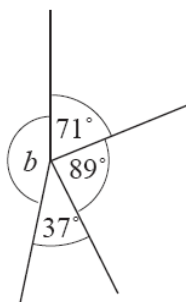


Name: _____

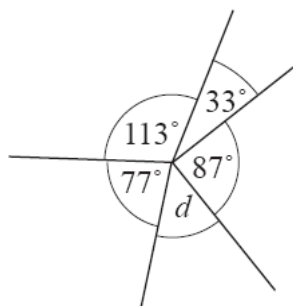
Parts of a Circle

1) Calculate the sizes of the angles marked by letters in the following diagrams:

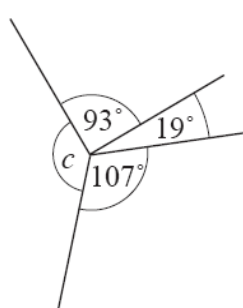
1)



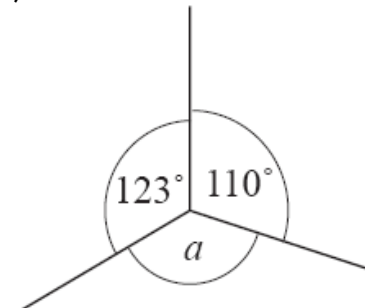
2)



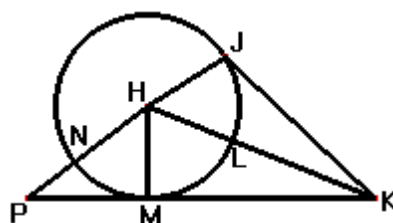
3)



4)

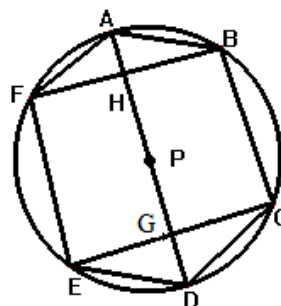


2) Given the circle of center H. Use the diagram to answer the questions



- 1) Name three different radii
- 2) Name a diameter
- 3) Name two points on the circle
- 4) Name two points outside the circle
- 5) Name two tangent lines

3) Use the diagram to answer the questions



- 1) Name three different chords
- 2) Name a diameter
- 3) Name four points on the circle
- 4) Name two points inside the circle