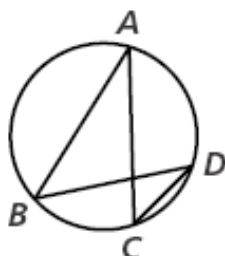


Name: _____

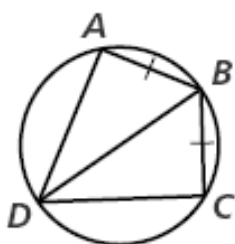
Inscribed Angles and Their Measures

1) For each diagram, indicate a pair of congruent inscribed angles.

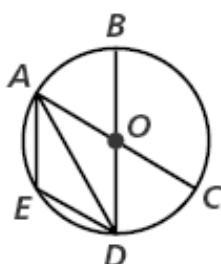
1)



2)

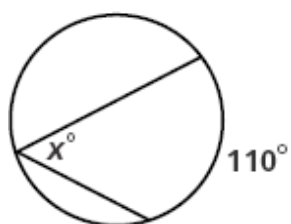


3)

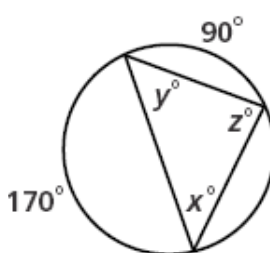


2) Find the value of each variable.

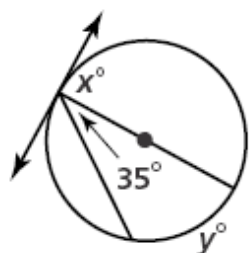
1)



2)



3)



4)

